

SUNSHINE MATH-1
Venus, XIX

Name: _____
(This shows my own thinking.)


- ★ 1. How many dimes and how many pennies do you need to buy the ice cream sundae?

sundae 41¢
soda 36¢



Answer: _____  's and _____  's

- ★★ 2. Amy bought 20 more rocks than shells. Which two bags did she buy? Circle the bags.

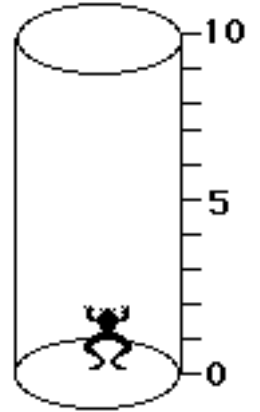


- ★★ 3. Jan tossed three beanbags.
Each beanbag landed on a different number.
Jan's score was 8.
What numbers did the beanbags land on?
Circle them.

1	3
2	4

★★★★

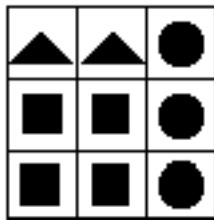
4. A frog fell in a 10-foot deep hole. Starting at 5:00 o'clock, the frog jumped up 3 feet each minute. But he fell back 1 foot while resting for the next jump. What time did the frog get out of the hole? Draw a picture of the frog 's trip, to help you.



Answer: The frog got out at _____.

★★

5. Write the numbers and the number sentences. The first is done for you.



Shapes
in All:

9

Remove:

all ▲'s

all ●'s

all ■'s

all ■'s
and
all ●'s

Number
Left:

7

Number
Sentence:

9 - 2 = 7

★

6. Draw 5 x's in each box.

Draw 4 extra x's.

How many x's in all?

Answer: _____ x's